

MODUL BERHITUNG

LEVEL 3



DAFTAR ISI

Perkalian 1-5

6-16

Perkalian 6-10

17-22

Latihan Perkalian

23-24

Konsep Pembagian

25-36

Latihan Pembagian

37-39

Lengkapilah Angkanya

11-2=

9-2=

15-3=

9-4=

5-4=

12-5=

9-3=

8-3=

15-4=

15-9=

7-4=

2-7=

12-5=

11-+3=

START

FINISH

OH NO!

YES!

4

Perkalian



•

•


4×2



•

•


2×3



•

•

3×3



•

•


2×3



•


•

3×3




Pembagian


Bagilah benda-benda pada gambar ke tiap orang dengan sama rata



A box containing 6 muffins arranged in two columns of three. To the right are two children: a boy with glasses and a girl. Below each child is a large orange rounded rectangle with a horizontal line, intended for writing the number of muffins each child receives.



A box containing 9 juice boxes arranged in three rows of three. To the right are three children: a boy, a boy with glasses, and a girl. Below each child is a large orange rounded rectangle with a horizontal line, intended for writing the number of juice boxes each child receives.



A box containing 12 pieces of broccoli arranged in three rows of four. To the right are two children: a girl and a girl. Below each child is a large orange rounded rectangle with a horizontal line, intended for writing the number of broccoli pieces each child receives.